



# Cambridge IGCSE™

CANDIDATE  
NAME

--

CENTER  
NUMBER

--	--	--	--	--

CANDIDATE  
NUMBER

--	--	--	--



**MATHEMATICS (US)**

**0444/21**

Paper 2 (Extended)

**May/June 2023**

**1 hour 30 minutes**

You must answer on the question paper.

You will need: Geometrical instruments

## INSTRUCTIONS

- Answer **all** questions.
- Use a black or dark blue pen. You may use an HB pencil for any diagrams or graphs.
- Write your name, center number and candidate number in the boxes at the top of the page.
- Write your answer to each question in the space provided.
- Do **not** use an erasable pen or correction fluid.
- Do **not** write on any bar codes.
- Calculators must **not** be used in this paper.
- You may use tracing paper.
- You must show all necessary work clearly.
- All answers should be given in their simplest form.

## INFORMATION

- The total mark for this paper is 70.
- The number of marks for each question or part question is shown in parentheses [ ].

This document has **12** pages.

## Formula List

For the equation

$$ax^2 + bx + c = 0$$

$$x = \frac{-b \pm \sqrt{b^2 - 4ac}}{2a}$$

Lateral surface area,  $A$ , of cylinder of radius  $r$ , height  $h$ .

$$A = 2\pi rh$$

Lateral surface area,  $A$ , of cone of radius  $r$ , sloping edge  $l$ .

$$A = \pi rl$$

Surface area,  $A$ , of sphere of radius  $r$ .

$$A = 4\pi r^2$$

Volume,  $V$ , of pyramid, base area  $A$ , height  $h$ .

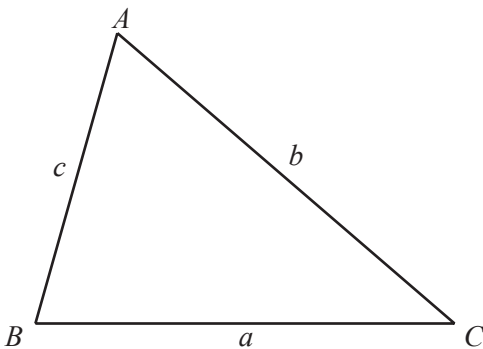
$$V = \frac{1}{3}Ah$$

Volume,  $V$ , of cone of radius  $r$ , height  $h$ .

$$V = \frac{1}{3}\pi r^2 h$$

Volume,  $V$ , of sphere of radius  $r$ .

$$V = \frac{4}{3}\pi r^3$$

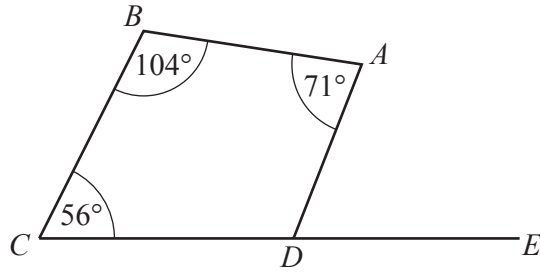


$$\frac{a}{\sin A} = \frac{b}{\sin B} = \frac{c}{\sin C}$$

$$a^2 = b^2 + c^2 - 2bc \cos A$$

$$\text{Area} = \frac{1}{2}bc \sin A$$

1



NOT TO SCALE

$CDE$  is a straight line.

Find angle  $ADE$ .

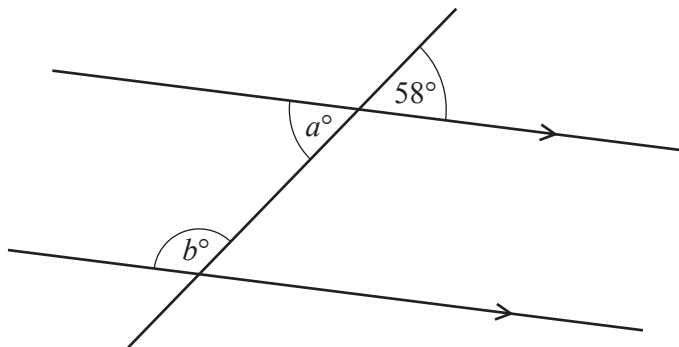
..... [2]

2 A train journey starts at 21 43.  
It takes 8 hours and 32 minutes.

Find the time the journey finishes.

..... [1]

3



NOT TO SCALE

The diagram shows a straight line intersecting two parallel lines.

Find the value of  $a$  and the value of  $b$ , giving geometric reasons for your answers.

$a =$  ..... because .....

$b =$  ..... because ..... [4]

- 4 By writing each number in the calculation correct to 1 significant figure, work out an estimate for the value of

$$\frac{6.7 \times 2.1}{18 - 5.9}$$

You must show all your work.

..... [2]

- 5 Eric has four colors of paint.  
The table shows the probability that he uses each color.

Colors	Red	Blue	Green	Yellow
Probability	0.3	0.4	0.1	$x$

Find the value of  $x$ .

$x =$  ..... [2]

- 6 Work out the volume of a sphere with diameter 6 cm.  
Give your answer in terms of  $\pi$ .

.....  $\text{cm}^3$  [2]

- 7 The scale of a map is 1 : 250 000.  
On a map, the length of an island is 6 cm.

Work out the actual length of the island, giving your answer in kilometers.

..... km [2]

8 The first four terms of two sequences are given.

Find the  $n$ th term of each sequence.

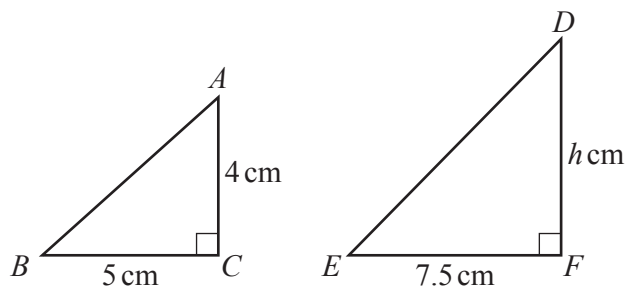
(a) 2      7      12      17

..... [2]

(b) 2      10      50      250

..... [2]

9



NOT TO  
SCALE

Triangle  $ABC$  is similar to triangle  $DEF$ .

Work out the value of  $h$ .

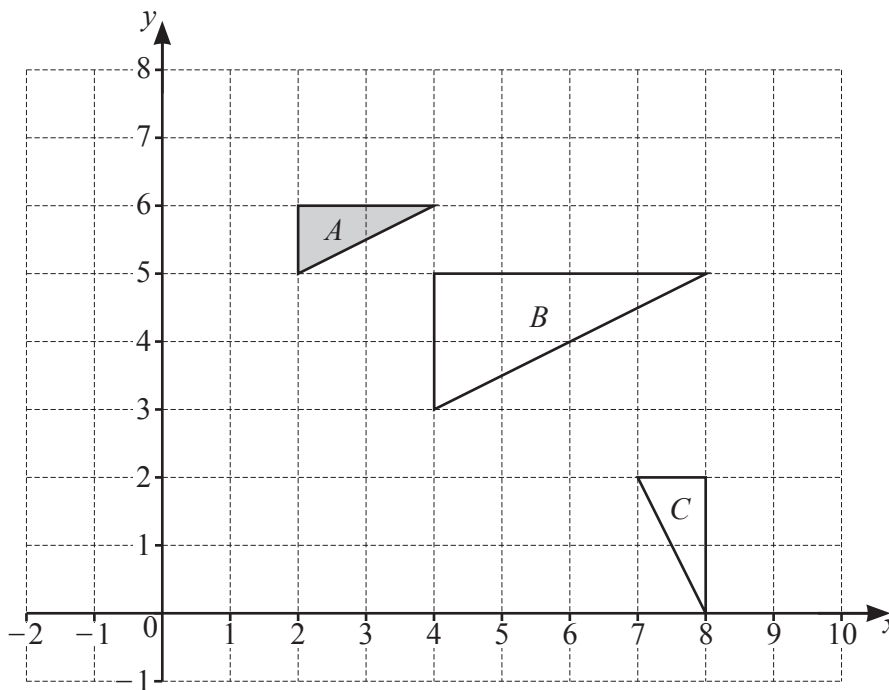
$h =$  ..... [2]

10 Work out  $2\frac{1}{7} \div \frac{5}{9}$ .

Give your answer as a mixed number in its simplest form.

..... [3]

11



(a) Describe the **single** transformation that maps

(i) triangle *A* onto triangle *B*

.....  
 ..... [3]

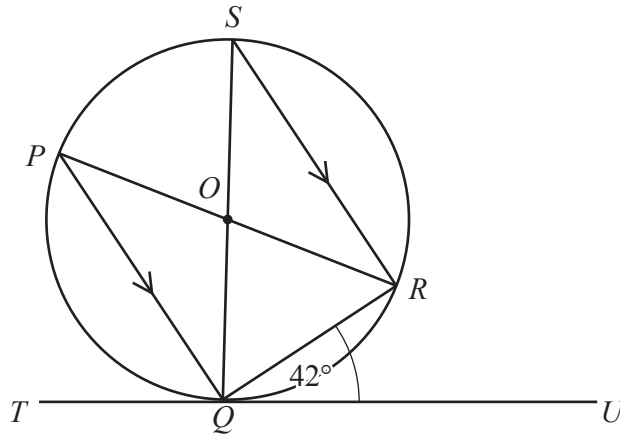
(ii) triangle *A* onto triangle *C*.

.....  
 ..... [3]

(b) Stretch triangle *A* with factor 2 and *y*-axis invariant.

[2]

12

NOT TO  
SCALE

$P$ ,  $Q$ ,  $R$ , and  $S$  are points on the circle, and  $TQU$  is a tangent to the circle at  $Q$ .  
 $PR$  and  $SQ$  intersect at the center  $O$  and  $PQ$  is parallel to  $SR$ .  
 Angle  $RQU = 42^\circ$ .

Find

(a) angle  $QSR$ Angle  $QSR = \dots\dots\dots$  [1](b) angle  $PQS$ Angle  $PQS = \dots\dots\dots$  [1](c) angle  $POS$ .Angle  $POS = \dots\dots\dots$  [1]

- 13** Anya invests \$4000 in an account that pays simple interest at a rate of  $r\%$  per year. At the end of 6 years, the account has earned \$480 in interest.

Find the value of  $r$ .

$$r = \dots\dots\dots [2]$$

- 14**  $y$  varies as the square of  $(x + 3)$ .  
When  $x = 2$ ,  $y = 50$ .

Find  $y$  when  $x = 1$ .

$$y = \dots\dots\dots [3]$$

- 15** A bag contains 5 green buttons, 2 blue buttons and 6 white buttons.  
Maya takes two buttons at random from the bag, without replacement.

Work out the probability that one button is green and the other button is not green.

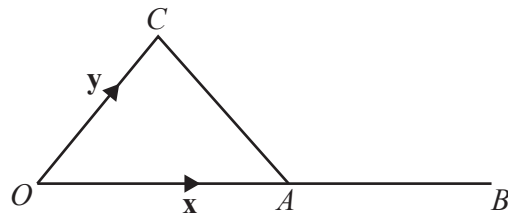
$$\dots\dots\dots [3]$$



16 (a) Find the magnitude of the vector  $\begin{pmatrix} -6 \\ 8 \end{pmatrix}$ .

..... [2]

(b)



NOT TO SCALE

The diagram shows a triangle  $OAC$ .  
 $A$  is the midpoint of  $OB$ .  
 $\vec{OA} = \mathbf{x}$  and  $\vec{OC} = \mathbf{y}$ .

Find  $\vec{CB}$  in terms of  $\mathbf{x}$  and  $\mathbf{y}$ .

$\vec{CB} =$  ..... [1]

17 Simplify  $(81x^{12})^{\frac{3}{4}}$ .

..... [2]

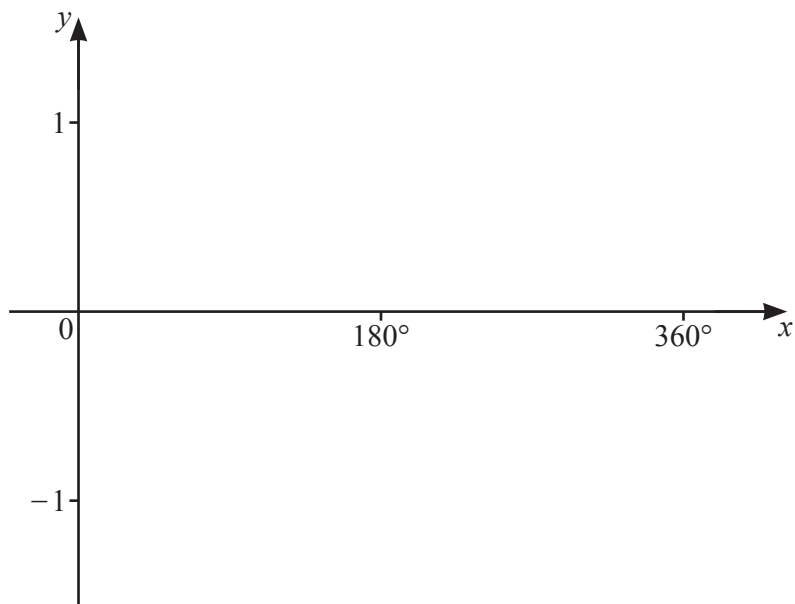
18 (a) Simplify  $(3\sqrt{2})^2$ .

..... [1]

(b) Write  $(\sqrt{5} - \sqrt{3})^2$  in the form  $a + b\sqrt{15}$ .

..... [2]

19 (a) On the diagram, sketch the graph of  $y = \cos x$  for  $0^\circ \leq x \leq 360^\circ$ .



[2]

(b) Solve the equation  $2 \cos x + 1 = 0$  for  $0^\circ \leq x \leq 360^\circ$ .

$x = \dots\dots\dots$  or  $x = \dots\dots\dots$  [3]

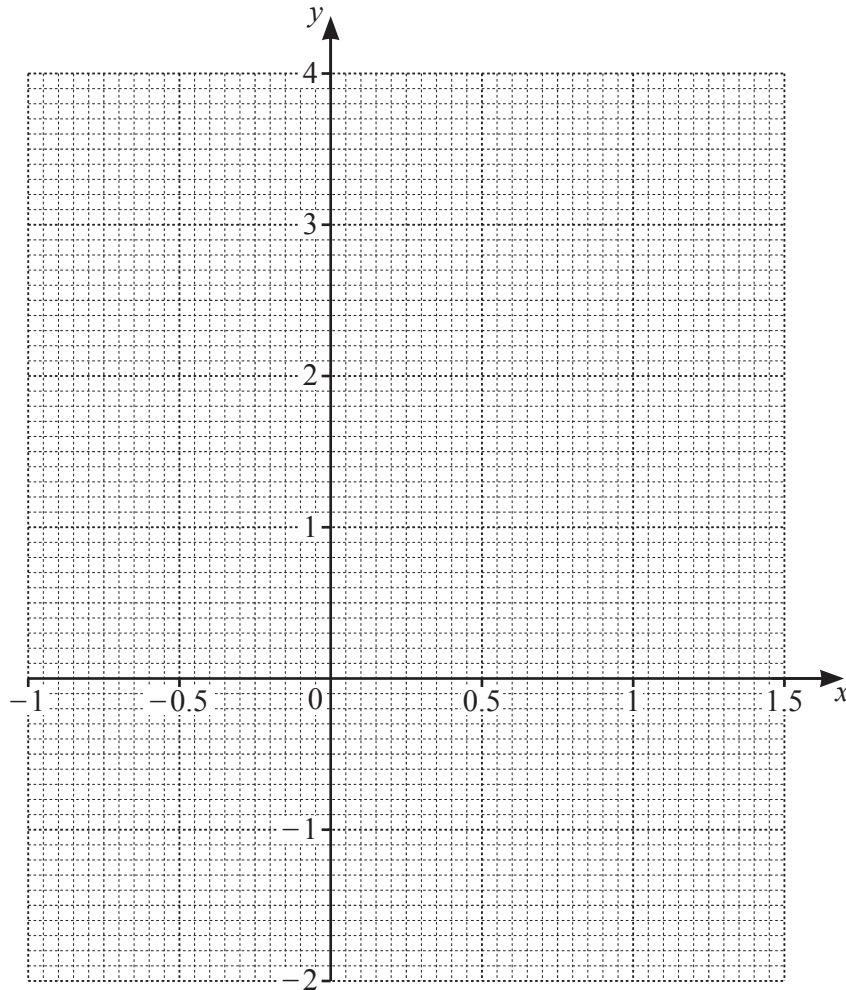
20 The table shows some values for  $y = 3x^2 - 2x - 1$ .

$x$	-1	-0.5	0	0.5	1	1.5
$y$		0.75	-1	-1.25	0	2.75

(a) Complete the table.

[1]

(b) On the grid, draw the graph of  $y = 3x^2 - 2x - 1$  for  $-1 \leq x \leq 1.5$ .



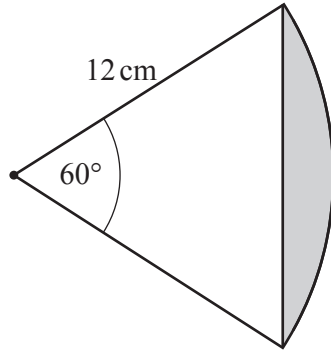
[3]

(c) By drawing a suitable straight line, solve the equation  $3x^2 - 4x - 2 = 0$  for  $-1 \leq x \leq 1.5$ .

$x = \dots\dots\dots$  [3]

**Questions 21 and 22 are printed on the next page.**

21



NOT TO SCALE

The diagram shows a sector of a circle with radius 12 cm.  
 Find the area of the shaded segment.  
 Give your answer in the form  $p\pi - q\sqrt{3}$ , where  $p$  and  $q$  are integers.

..... [3]

22 Simplify  $\frac{2x^2 - 11x - 6}{4x^2 + 2x}$ .

..... [4]

---

Permission to reproduce items where third-party owned material protected by copyright is included has been sought and cleared where possible. Every reasonable effort has been made by the publisher (UCLES) to trace copyright holders, but if any items requiring clearance have unwittingly been included, the publisher will be pleased to make amends at the earliest possible opportunity.

To avoid the issue of disclosure of answer-related information to candidates, all copyright acknowledgements are reproduced online in the Cambridge Assessment International Education Copyright Acknowledgements Booklet. This is produced for each series of examinations and is freely available to download at [www.cambridgeinternational.org](http://www.cambridgeinternational.org) after the live examination series.

Cambridge Assessment International Education is part of Cambridge Assessment. Cambridge Assessment is the brand name of the University of Cambridge Local Examinations Syndicate (UCLES), which is a department of the University of Cambridge.