



# Cambridge IGCSE™

CANDIDATE  
NAME


--

CENTRE  
NUMBER

--	--	--	--	--

CANDIDATE  
NUMBER

--	--	--	--



**MATHEMATICS**

**0580/13**

Paper 1 (Core)

**October/November 2020**

**1 hour**

You must answer on the question paper.

You will need: Geometrical instruments

## INSTRUCTIONS

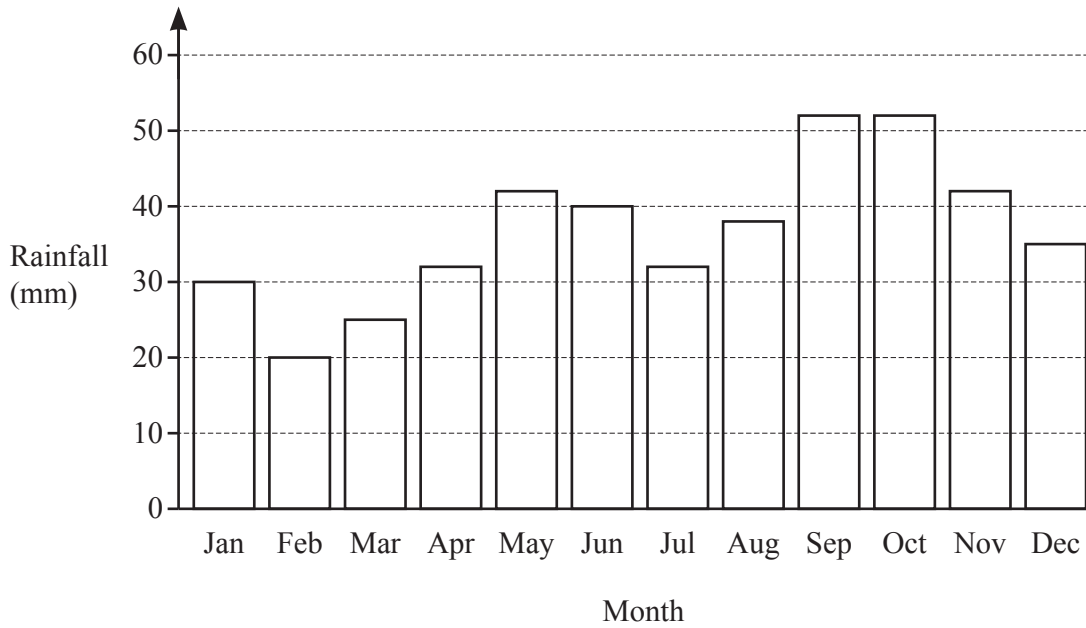
- Answer **all** questions.
- Use a black or dark blue pen. You may use an HB pencil for any diagrams or graphs.
- Write your name, centre number and candidate number in the boxes at the top of the page.
- Write your answer to each question in the space provided.
- Do **not** use an erasable pen or correction fluid.
- Do **not** write on any bar codes.
- You should use a calculator where appropriate.
- You may use tracing paper.
- You must show all necessary working clearly.
- Give non-exact numerical answers correct to 3 significant figures, or 1 decimal place for angles in degrees, unless a different level of accuracy is specified in the question.
- For  $\pi$ , use either your calculator value or 3.142.

## INFORMATION

- The total mark for this paper is 56.
- The number of marks for each question or part question is shown in brackets [ ].

This document has **12** pages. Blank pages are indicated.

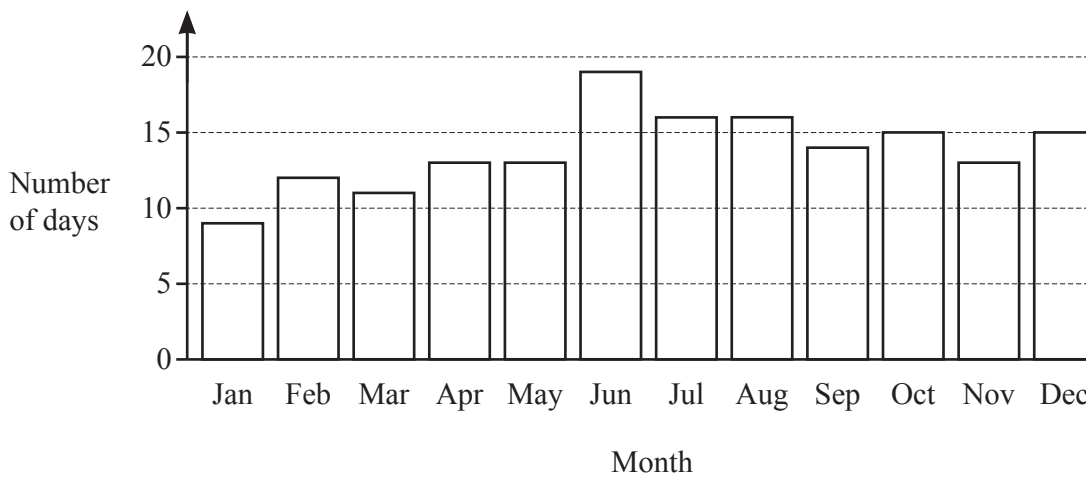
1 This bar chart shows the amount of rainfall, in mm, for each month of one year in a city.



(a) Write down the month with the least amount of rainfall.

..... [1]

(b) This bar chart shows the number of days it rained each month for the same year in this city.



Mia says that the months with the most rainfall also have the greatest number of days it rained.

Explain why she is wrong.

.....  
 .....

[1]

2 Complete this bill.

2.5 kg potatoes at \$1.12 per kg	\$ .....
..... kg bananas at \$1.05 per kg	\$ .....
Total	= \$ 4.69

[3]

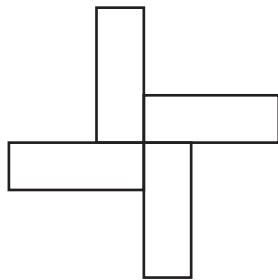
3 (a) Write 97.4236 correct to 3 decimal places.

..... [1]

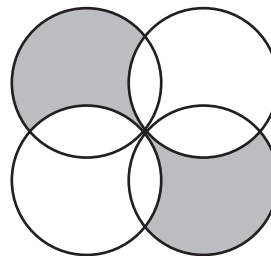
(b) Write down the reciprocal of 2.

..... [1]

4 Write down the order of rotational symmetry of each shape.



.....



.....

[2]

5 The mean of seven numbers is 16.

Six of these numbers are 12, 20, 19, 10, 21 and 13.

Find the seventh number.

..... [2]

- 6 In triangle  $ABC$ ,  $BC = 7.6$  cm and  $AC = 6.2$  cm.

**Using a ruler and compasses only**, construct triangle  $ABC$ .

Leave in your construction arcs.

The side  $AB$  has been drawn for you.



[2]

- 7 (a) This table shows the temperature, in  $^{\circ}\text{C}$ , at midnight and at 3 pm for four cities on the same day.

City	Temperature at midnight ( $^{\circ}\text{C}$ )	Temperature at 3 pm ( $^{\circ}\text{C}$ )
Sydney	21	28
Oslo	-3	1
Toronto	-18	-8
Seoul	-5	4

Use the table to complete this statement.

The city with the biggest difference in temperature between midnight and 3 pm

is ..... with a difference of ..... $^{\circ}\text{C}$ .

[2]

- (b) The temperature at midnight in Moscow was  $-11^{\circ}\text{C}$ .  
At 3 pm the temperature has increased by  $5^{\circ}\text{C}$ .

Work out the temperature at 3 pm.

..... $^{\circ}\text{C}$  [1]

8 Calculate.

$$\frac{4}{\sqrt{0.0025}}$$

..... [1]

9 Thor changes 40 000 Icelandic Krona into dollars when the exchange rate is 1 krona = \$0.0099 .

Work out how many dollars he receives.

\$ ..... [1]

10 Ethan invests \$6400 at a rate of 2.6% per year simple interest.

Calculate the total value of his investment at the end of 3 years.

\$ ..... [3]

11 A straight line,  $l$ , has equation  $y = 5x + 12$ .

(a) Write down the gradient of line  $l$ .

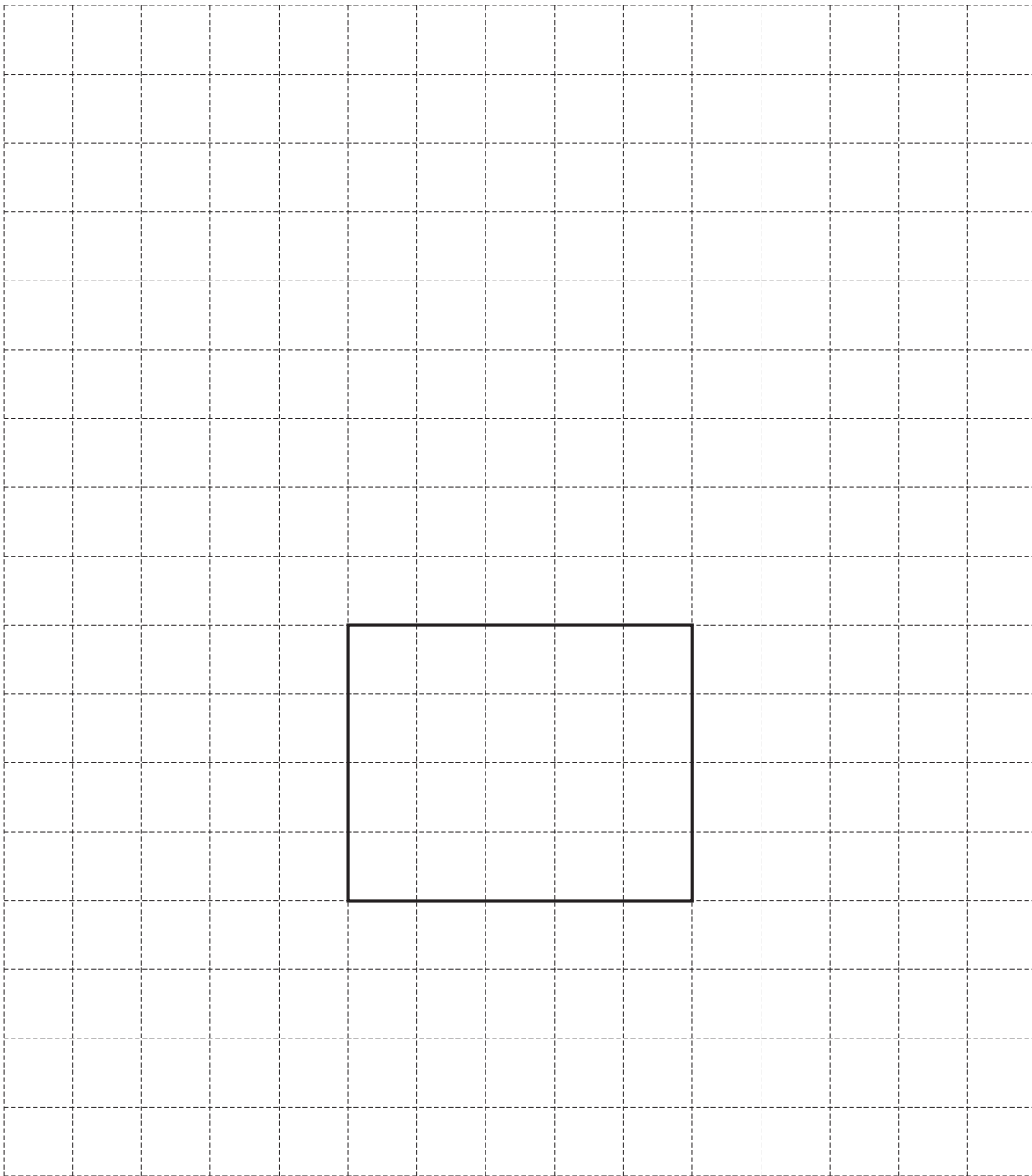
..... [1]

(b) Find the coordinates of the point where line  $l$  crosses the  $x$ -axis.

( ..... , ..... ) [2]

- 12 (a) A cuboid has length 5 cm, width 4 cm and height 3 cm.

On the  $1\text{ cm}^2$  grid, complete the net of the cuboid.  
One face has been drawn for you.

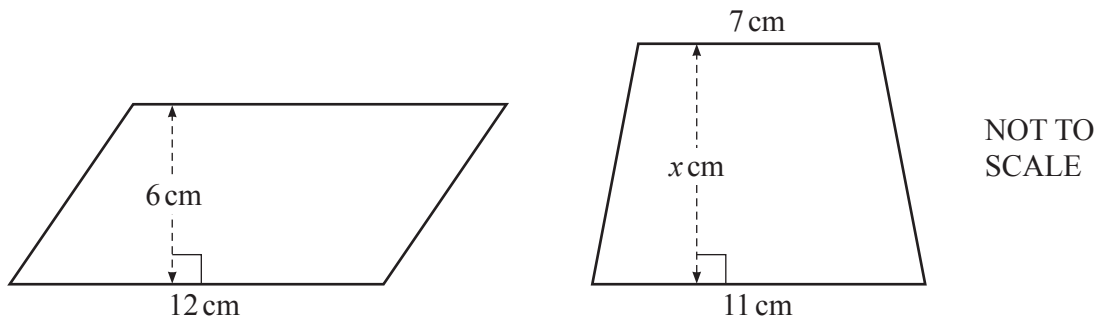


[3]

- (b) Find the volume of the cuboid.

.....  $\text{cm}^3$  [2]

13



The area of the parallelogram is the same as the area of the trapezium.

Work out the value of  $x$ .

$$x = \dots\dots\dots [3]$$

14 The length,  $l$  cm, of a line is 18.3 cm, correct to the nearest millimetre.

Complete this statement about the value of  $l$ .

$$\dots\dots\dots \leq l < \dots\dots\dots [2]$$

- 15 By writing each number correct to 1 significant figure, estimate the value of

$$\frac{37.8 \times 13.2}{28.5 + 22.1}$$

You must show all your working.

..... [2]

- 16 A bag contains 7 red discs, 5 green discs and 2 pink discs.

Helen takes one disc at random, records the colour and replaces it in the bag.  
She does this 140 times.

Find how many times she expects to take a green disc.

..... [2]

- 17 Expand the brackets and simplify.

$$4(2m + 3) - 5(m - 2)$$

..... [2]



- 18 Ramond walks 2460 metres in 33 minutes.

Work out Ramond's average speed in kilometres per hour.

..... km/h [3]

- 19 A regular polygon has an exterior angle of  $20^\circ$ .

Work out the number of sides of this polygon.

..... [1]

- 20 **Without using a calculator**, work out  $1\frac{1}{7} \times 2\frac{1}{10}$ .

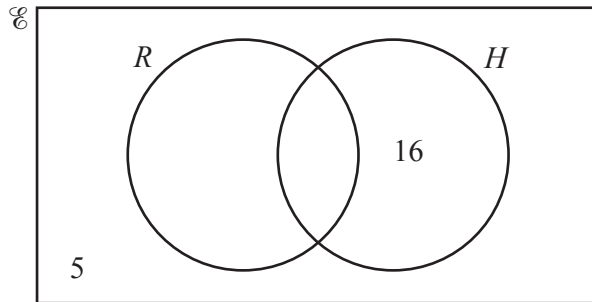
You must show all your working and give your answer as a mixed number in its simplest form.

..... [3]

- 21  $\mathcal{C} = \{\text{children in a group}\}$   
 $R = \{\text{children who own a rabbit}\}$   
 $H = \{\text{children who own a hamster}\}$

There are 40 children in the group.  
 19 children own a rabbit.  
 27 children own a hamster.

(a) Complete the Venn diagram.

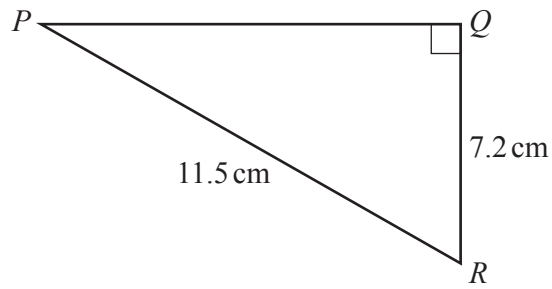


[2]

(b) Write down  $n(R \cap H)$ .

..... [1]

22

NOT TO  
SCALECalculate  $PQ$ . $PQ = \dots\dots\dots$  cm [3]

- 23 Solve the simultaneous equations.  
You must show all your working.

$$\begin{aligned} 3x - 8y &= 22 \\ x + 4y &= 4 \end{aligned}$$

 $x = \dots\dots\dots$  $y = \dots\dots\dots$  [3]

**BLANK PAGE**

---

Permission to reproduce items where third-party owned material protected by copyright is included has been sought and cleared where possible. Every reasonable effort has been made by the publisher (UCLES) to trace copyright holders, but if any items requiring clearance have unwittingly been included, the publisher will be pleased to make amends at the earliest possible opportunity.

To avoid the issue of disclosure of answer-related information to candidates, all copyright acknowledgements are reproduced online in the Cambridge Assessment International Education Copyright Acknowledgements Booklet. This is produced for each series of examinations and is freely available to download at [www.cambridgeinternational.org](http://www.cambridgeinternational.org) after the live examination series.

Cambridge Assessment International Education is part of the Cambridge Assessment Group. Cambridge Assessment is the brand name of the University of Cambridge Local Examinations Syndicate (UCLES), which itself is a department of the University of Cambridge.